


# Year 1 Spring 2 Maths Activity Mat 4

## Section 1

How many sides do the shapes have altogether?



## Section 2

What month comes next?

May, June, July,



## Section 3

$$\square - 5 = 4$$


## Section 4

Put a ring around the even numbers.

7, 9, 12, 4, 8, 11

## Section 5

Emily gave four friends 2 biscuits each. How many biscuits did she give altogether?



## Section 6

$$30 + 40 = \square$$

## Section 7

Draw two more flowers.


How many flowers are there altogether?



## Section 8

What number comes next?

2, 4, 6, 8, 10,



# Year 1 Spring 2 Maths Activity Mat 4 Answers

## Section 1

How many sides do the shapes have altogether?

8

## Section 2

What month comes next?

May, June, July,

August

## Section 3

$$9 - 5 = 4$$

## Section 4

Put a ring around the even numbers.

7, 9, 12, 4, 8, 11

## Section 5

Emily gave four friends 2 biscuits each. How many biscuits did she give altogether?

8

## Section 6

$$30 + 40 = 70$$

## Section 7

Draw two more flowers.

How many flowers are there altogether?

10

## Section 8

What number comes next?


2, 4, 6, 8, 10,

12

# Year 1 Spring 2 Maths Activity Mat 4

## Section 1

How many sides do the shapes have altogether?



## Section 2

What month comes next?

October, November,  
December,

## Section 3

$$\square - 7 = 6$$


## Section 4

Put a ring around the even numbers.

14, 8, 13, 21, 18, 15

## Section 5

Mahmood gave seven friends 2 biscuits each. How many biscuits did he give altogether?



## Section 6

$$20 + 50 + 20 =$$

## Section 7

Draw five more flowers.

How many flowers are there altogether?



## Section 8

What number comes next?

22, 24, 26, 28,

# Year 1 Spring 2 Maths Activity Mat 4 Answers

## Section 1

How many sides do the shapes have altogether?

11

## Section 2

What month comes next?

October, November,  
December,

January

## Section 3

$$13 - 7 = 6$$

## Section 4

Put a ring around the even numbers.

14, 8, 13, 21, 18, 15

## Section 5

Mahmood gave seven friends 2 biscuits each. How many biscuits did he give altogether?

14

## Section 6

$$20 + 50 + 20 =$$

90

## Section 7

Draw five more flowers.

How many flowers are there altogether?

12

## Section 8

What number comes next?


22, 24, 26, 28,

30

# Year 1 Spring 2 Maths Activity Mat 4

## Section 1

How many sides do the shapes have altogether?



## Section 2

What month comes first?

March,  
April, May

## Section 3

$$\square - 13 = 18$$

## Section 4

Put a ring around the even numbers.

23, 39, 42, 35, 84, 48

## Section 5


Jaime gave eight friends 2 biscuits each. How many biscuits did she give altogether?

## Section 6

$$70 + 50 + 30 =$$

## Section 7

If five flowers were cut, how many flowers would be left?



## Section 8

What number comes next?

50, 55, 60, 65, 70,

# Year 1 Spring 2 Maths Activity Mat 4 Answers

## Section 1

How many sides do the shapes have altogether?

15

## Section 2

What month comes first?

February March,

April, May

## Section 3

$$31 - 13 = 18$$

## Section 4

Put a ring around the even numbers.

23, 39, 42, 35, 84, 48

## Section 5

Jaime gave eight friends 2 biscuits each. How many biscuits did she give altogether?

16

## Section 6

$$70 + 50 + 30 =$$

150

## Section 7

If five flowers were cut, how many flowers would be left?

9

## Section 8

What number comes next?

50, 55, 60, 65, 70,

75